

Chapter Test A

For use after Chapter 7

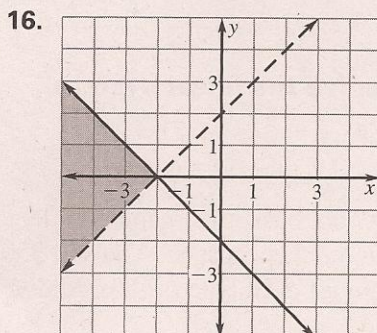
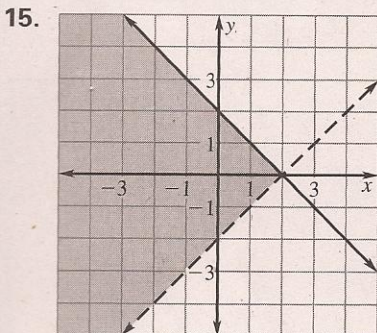
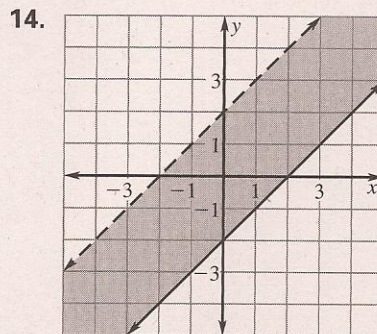
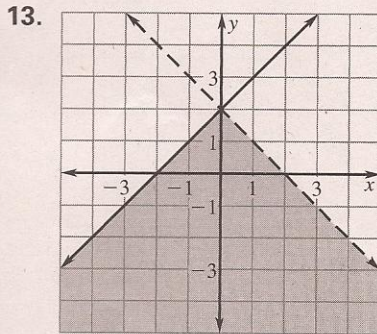
In Questions 13–16, match the system of linear inequalities with its graph.

A. $-x + y < 2$
 $-x + y \geq -2$

B. $-x + y > 2$
 $x + y \leq -2$

C. $-x + y > -2$
 $x + y \leq 2$


D. $-x + y \leq 2$
 $x + y < 2$



- 13. _____
- 14. _____
- 15. _____
- 16. _____
- 17. _____
- 18. _____

Graph the system of linear inequalities.

17. $y \geq -2$
 $x < 2$



18. $y < x + 1$
 $y \geq 3$

